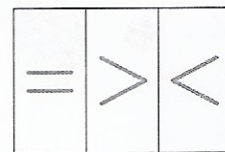

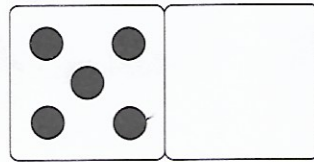
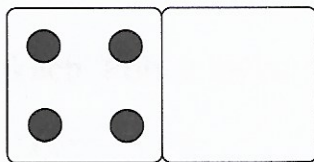
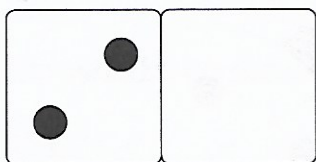


- Pisz cyfry i znaki po śladzie.



- Dorysuj kropki, aby razem było ich tyle, ile wskazuje cyfra. Uzupełnij działania.

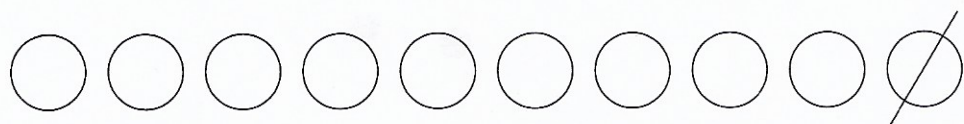


$$\square + \square = 4$$

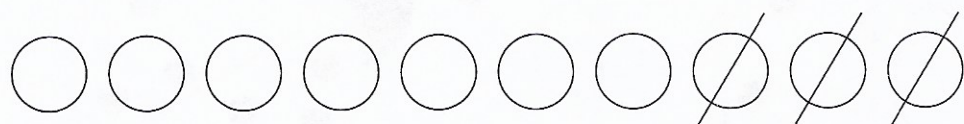
$$\square + \square = 6$$

$$\square + \square = 10$$

- Policz, ile kółek zostało. Uzupełnij działania.



$$10 - 1 = 9$$



$$\square - \square = \square$$



$$\square - \square = \square$$

- Policz kropki na kostkach. Porównaj ich liczbę. Wpisz odpowiednie cyfry i znaki.

